



SuperNovaSchool

LEARN TO BE DISTINCT

ENTRY TEST

Academic Session 2019-20

GRADE VI

MATHEMATICS

Name: _____

Date: _____

Time Allowed: 45 minutes

Total Marks	Marks Obtained	Percentage
25		

Remarks:

Q-1 Round off the following numbers

[3]

Numbers	Nearest hundred	Nearest thousand
2 963		
74 650		
28 541		

Q-2 Find the HCF of

[3]

208 , 488

Q-3 Find the LCM of

[3]

196 , 244

Q-4 Find the missing numbers.

[2]

a) $25 : 15 = 5 : \underline{\quad}$

b) $\underline{\quad} : 4 = 45 : 20$

Q.5 There are 1200 pupils in a school. $\frac{1}{4}$ Of them are boys. Find the number of girls in a school. [3]

Q-6 Divide and write your answer in the simplest form.

[3]


a) $\frac{5}{6} \div 75 =$

b) $\frac{3}{7} \div 27 =$

Q-7 a) Multiply 4.72 by 7000

[4]

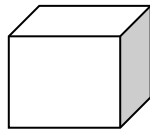
b) Divide 43.5 by 800



Q-8 Find the volume of each of the following.


[4]

a)



4 cm

b)



length = 9 cm, breadth = 5cm, height = 3 cm